

Awesome Learning

Grade

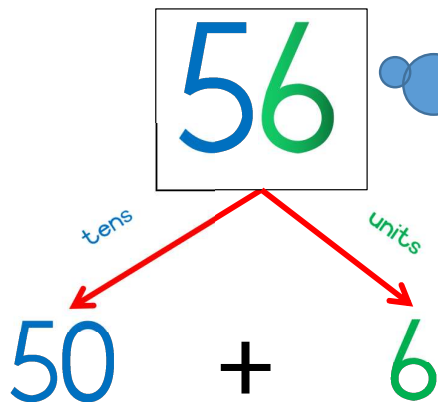
3



Name: \_\_\_\_\_

TERM 2

## Decompose two-digit numbers



RULE: Remember place value. Break up the numbers into tens and units when adding.

Can you try it yourself?

$$62 = \underline{\quad\quad} + \underline{\quad\quad}$$

$$71 = \underline{\quad\quad} + \underline{\quad\quad}$$

$$40 = \underline{\quad\quad} + \underline{\quad\quad}$$

$$97 = \underline{\quad\quad} + \underline{\quad\quad}$$

$$89 = \underline{\quad\quad} + \underline{\quad\quad}$$

Can you do the addition sums now?

$$40 + 8 = \underline{\quad\quad}$$

$$50 + 3 = \underline{\quad\quad}$$

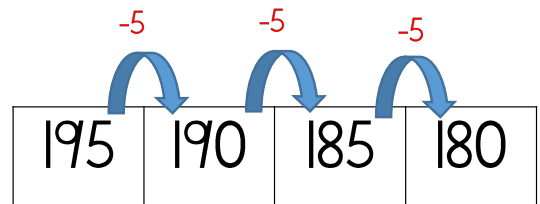
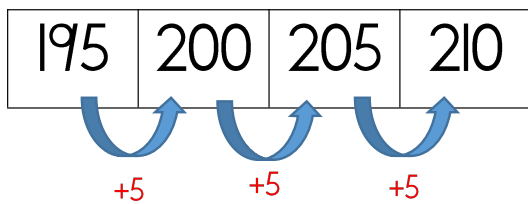
$$20 + 5 = \underline{\quad\quad}$$

$$90 + 6 = \underline{\quad\quad}$$

Count forwards and backwards in 5's



Counting in 5's should be very easy by simply adding 5 or subtracting 5. Lets see!



Can you try now?

240	235					
-----	-----	--	--	--	--	--

300	305					
-----	-----	--	--	--	--	--

110	115					
-----	-----	--	--	--	--	--

200	195					
-----	-----	--	--	--	--	--

275	280					
-----	-----	--	--	--	--	--

# Double



Double means to add with the same number:

$$2 + 2 = 4$$
$$21 + 21 = 42$$

Lets see if you can!! Do the sum example:

$$14 \rightarrow 14 + 14 = 28$$

$20 \rightarrow \underline{\hspace{2cm}}$

$15 \rightarrow \underline{\hspace{2cm}}$

$19 \rightarrow \underline{\hspace{2cm}}$

$17 \rightarrow \underline{\hspace{2cm}}$

$23 \rightarrow \underline{\hspace{2cm}}$

$27 \rightarrow \underline{\hspace{2cm}}$

$26 \rightarrow \underline{\hspace{2cm}}$

$30 \rightarrow \underline{\hspace{2cm}}$

# Addition by using the breaking up method.


Example:

$$22 + 43 = 65$$

$$20 + 40 = 60$$

$$2 + 3 = 5$$

$$60 + 5 = 65$$




$$12 + 53 =$$

$$29 + 41 =$$

$$64 + 35 =$$

$$52 + 33 =$$



Practise the number names



71 - seventy one

243 - \_\_\_\_\_

440 - \_\_\_\_\_

398 - \_\_\_\_\_

356 - \_\_\_\_\_

185 - \_\_\_\_\_

# ow - sound

Choose the correct word to complete the sentences.

cow bow owl  
drown brown sow  
bowl towel down  
shower flowers



1. In the spring we see a lot of \_\_\_\_\_.
2. I take my \_\_\_\_\_ to the beach.
3. The \_\_\_\_\_ gives milk every week.
4. The \_\_\_\_\_ is a very wise bird.
5. The colour of chocolate is \_\_\_\_\_.
6. After my football game I take a \_\_\_\_\_.

Choose any five words in the block and make your own five sentences.

cow bow owl  
drown brown sow  
bowl towel down  
shower flowers

A writing area consisting of 20 horizontal lines for text. A vertical red line is positioned on the left side, serving as a margin. The lines are evenly spaced and extend across most of the page width.



# Healthy and unhealthy food

Put the food in the correct group.

pizza meat eggs ice-cream  
hamburger spinach banana sweets  
chips grapes

Healthy food	Unhealthy food

Why is fruit healthy for you?

---

---

---

What is your favourite vegetable?

---


---

---

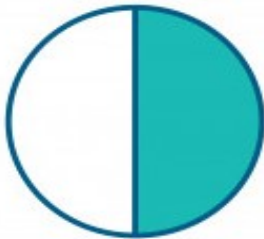
# Fractions



Lets see fractions as when you are sharing a pizza with your friends. Look at the pictures and see how we share it between 2 friends or 4 friends or even 8 friends.



1 whole



halve



thirds



quarters


How many blocks are coloured?



= 2 thirds



= \_\_\_\_\_



= \_\_\_\_\_



= \_\_\_\_\_



A blank sheet of white paper with a dark blue border. The page is filled with horizontal black lines, creating a series of rows for writing. The lines are evenly spaced and extend across the width of the page.

Decompose the following three digit numbers

$391 = \underline{\quad} + \underline{\quad} + \underline{\quad}$

$467 = \underline{\quad} + \underline{\quad} + \underline{\quad}$

$240 = \underline{\quad} + \underline{\quad} + \underline{\quad}$

$159 = \underline{\quad} + \underline{\quad} + \underline{\quad}$

Use one of the following to compare the number  $>$   $<$  or  $=$

$282 \underline{\quad} 318$

$442 \underline{\quad} 460$

$271 \underline{\quad} 271$

$592 \underline{\quad} 0$

$472 \underline{\quad} 454$

$429 \underline{\quad} 398$

$335 \underline{\quad} 115$

$119 \underline{\quad} 191$


Count in 3's

225	228								
392	395								
151	147								

Count in 4's

410	414								
380	376								
280	284								

Copy and extend the geometric pattern.



# Opposites



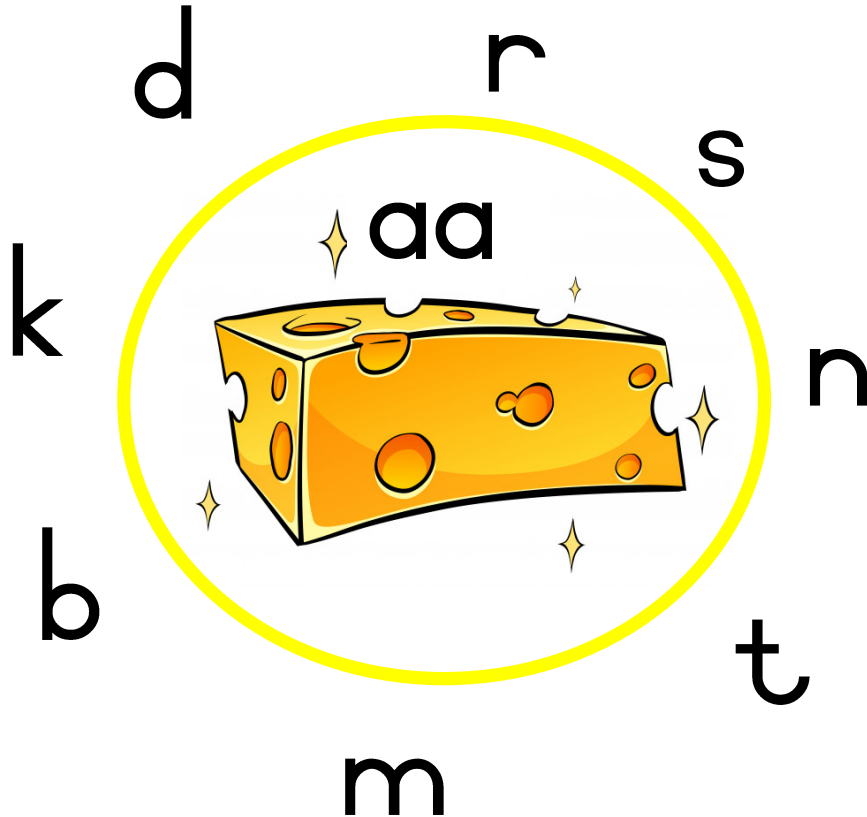
Find the correct opposite

high
slow
close
dirty
hot
push
stand
walk
big
night

pull
day
run
sit
cold
low
clean
open
fast
small

# aa-klank

Hoeveel woorde kan jy bou met die -aa- klank?



Skryf die woorde wat jy kon bou in die blokkies.


Gebruik die volgende woorde en maak jou eie sinne?

maan



---

---

---

---

saad

---

---

---

---

maat

---

---

---

---

raas

---

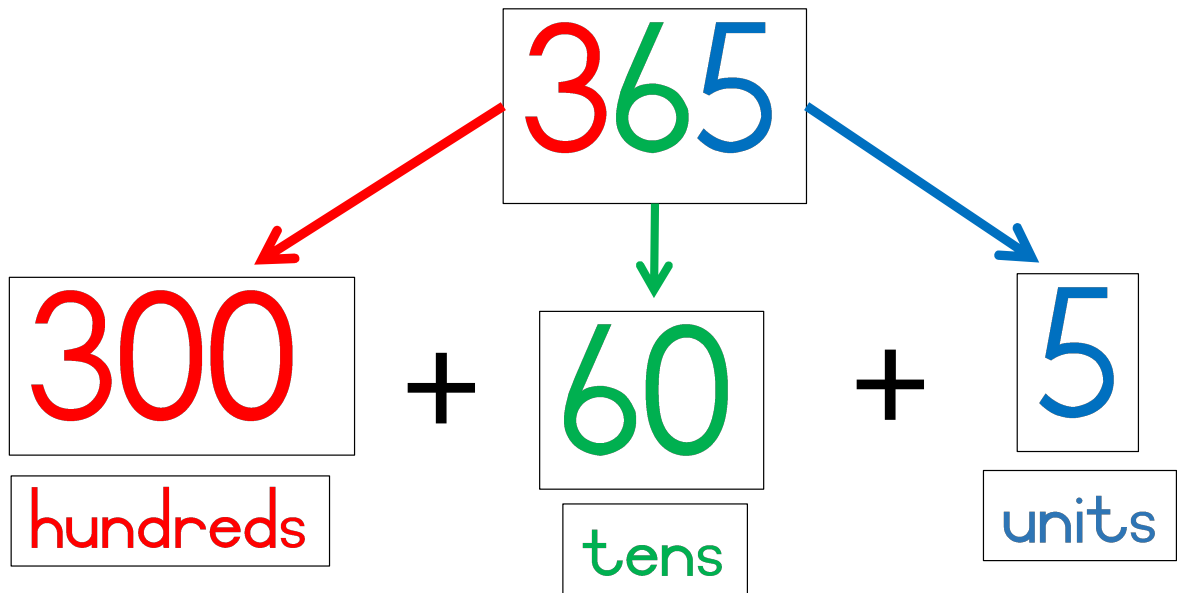
---

---

---



# Decompose three-digit numbers



Can you do it?

$433 = \underline{\quad} + \underline{\quad} + \underline{\quad}$

$527 = \underline{\quad} + \underline{\quad} + \underline{\quad}$

$195 = \underline{\quad} + \underline{\quad} + \underline{\quad}$

$209 = \underline{\quad} + \underline{\quad} + \underline{\quad}$

$410 = \underline{\quad} + \underline{\quad} + \underline{\quad}$

$86 = \underline{\quad} + \underline{\quad} + \underline{\quad}$

$450 = \underline{\quad} + \underline{\quad} + \underline{\quad}$

$311 = \underline{\quad} + \underline{\quad} + \underline{\quad}$

$376 = \underline{\quad} + \underline{\quad} + \underline{\quad}$

Arrange the following animals from heaviest to lightest.

A: 122kg

B: 246kg

C: 309kg



D: 118kg

E: 133kg

F: 203kg

G: 100kg



# Fractions



$\frac{1}{2}$



$\frac{2}{3}$



$\frac{3}{8}$



$\frac{3}{4}$



$\frac{2}{9}$



$\frac{3}{6}$



$\frac{4}{10}$



$\frac{3}{5}$

How many you need to make a whole?

1. 1 half + 1 half = 1 whole

2. 2 quarters + \_\_\_\_\_ = 1 whole

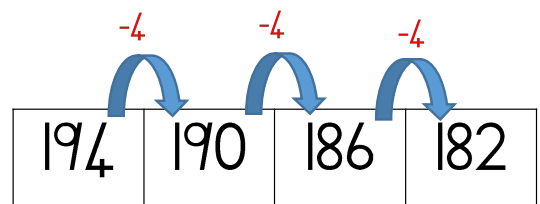
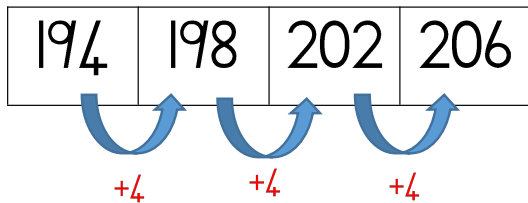
3. 2 thirds + \_\_\_\_\_ = 1 whole

4. 1 quarter + \_\_\_\_\_ = 1 whole

5. 1 third + \_\_\_\_\_ = 1 whole

# Count forwards and backwards in 4's

Counting in 4's should be very easy by simply adding 4 or subtracting 4. Lets see!



Can you try now?

240	234					
-----	-----	--	--	--	--	--


304	308					
-----	-----	--	--	--	--	--

110	106					
-----	-----	--	--	--	--	--

200	196					
-----	-----	--	--	--	--	--

274	278					
-----	-----	--	--	--	--	--

Healthy food crossword puzzle. Do you know all the vegetables in the crossword puzzle?



Write your own story about what is your favourite vegetable or fruit and why?

A writing template consisting of a vertical red margin line on the left side and 20 horizontal black lines for text, providing a structured space for writing a story.

Copy the Alphabet in cursive and remember your finger spaces.

a b c d e f g h i j k l m n o p q r s t u v w x y z  
A B C D E F G H I J K L M N O P Q R S T U V W X Y Z

A series of horizontal lines for handwriting practice. A vertical red line is positioned on the left side, serving as a guide for letter width. The lines are evenly spaced and extend across the width of the page.

Arrange the words into the correct columns

owl    bow    daughter    drought  
claw    slaughter    draw  
rough

ow	ou	au	aw



Fill in the missing sound ow or ou

1. b\_\_\_\_\_
2. cr\_\_\_\_\_n
3. m\_\_\_\_\_th
4. cl\_\_\_\_\_n
5. p\_\_\_\_\_ch
6. ch\_\_\_\_\_
7. sh\_\_\_\_\_t
8. fl\_\_\_\_\_er
9. s\_\_\_\_\_th
10. f\_\_\_\_\_l





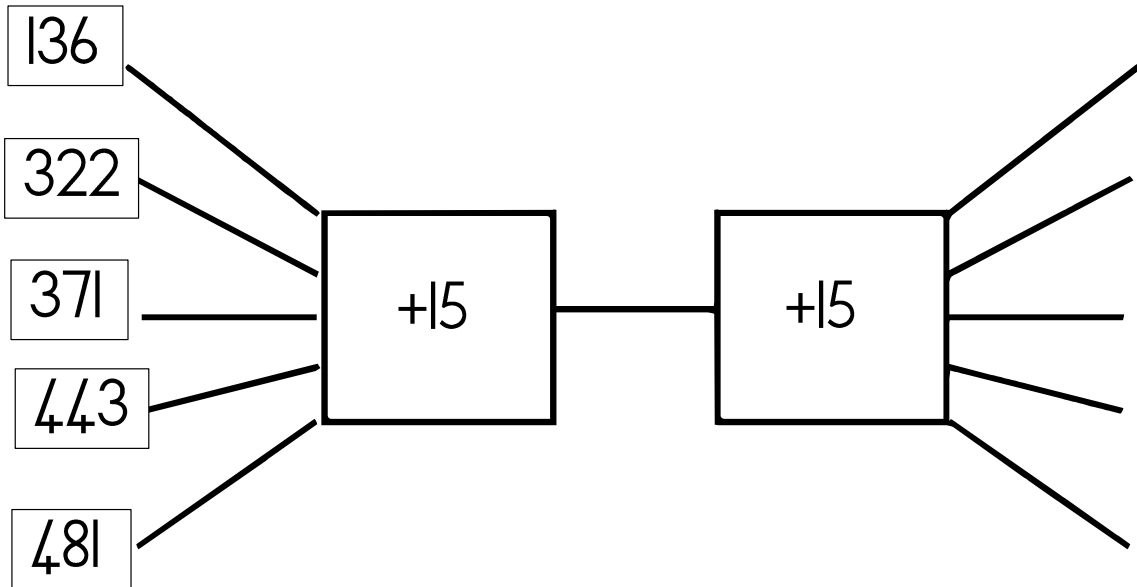
Try the maze and see if you can find the way?

			38	24	78	28	80	48	98
			79	57	15	5	6	58	90
			1	2	3	27	7	29	30
31	32	33	34	3	36	37	8	39	40
41	42	43	44	4	46	47	9	49	50
88	26	7	6	5	12	21	22	23	60
61	9	8	15	65	19	20	68	24	70
74	10	73	16	17	18	77			
81	11	12	13	85	17	20			
91	64	93	14	15	16	97			

Fill in the missing numbers.

311	312								320
							338		
									350
			354						
	372								
						397			

## Complete the sums



## Number names

183	
222	
295	
346	
473	

How quickly can you do the following sums?

1.  $300 + 100 =$  \_\_\_\_\_

2.  $250 + 50 =$  \_\_\_\_\_

3.  $100 + 100 =$  \_\_\_\_\_

4.  $400 - 200 =$  \_\_\_\_\_

5.  $450 - 100 =$  \_\_\_\_\_

6.  $300 - 200 =$  \_\_\_\_\_

Vul die regte woord om die sinne te voltooi.

-lf woorde

kalf

salf

self

delf

wolf

1. Die \_\_\_\_\_ vang die skape.
2. Sy smeer \_\_\_\_\_ aan haar seer voet.
3. Die \_\_\_\_\_ drink melk aan sy mamma.
4. Ek is \_\_\_\_\_ baie moeg vandag.
5. Hy \_\_\_\_\_ vir goud in die berg.

Kies enige twee woorde in die blokkies en maak jou eie twee sinne.

Handwriting practice area with 10 horizontal lines and a vertical red margin line on the left side.

Copy the paragraph and use the correct **punctuation!**

zelma cara and tommy are friends. they play together everyday. they love to go to the beach. they like to swim in the sea. cara loves the yellow blue and green flowers. All three of them like to eat different fruit like apples bananas strawberries and oranges. do you think they like vegetables

Handwriting practice lines consisting of a vertical red margin line on the left and ten horizontal black lines for writing.



When do we use a question mark?

We use question marks when we ask a direct or indirect question.

What is your name?

How are you?

Do you have a blue pencil?

# Measurement

Estimate and measure lengths in centimeters using a ruler. (first estimate and then measure lengths)



Estimate

Measure



Estimate

Measure

How many centimeters in a meter? \_\_\_\_\_

How many meter in a kilometer? \_\_\_\_\_

How many hours in a day? \_\_\_\_\_

How many seconds in 1 minute? \_\_\_\_\_

How many days in a week? \_\_\_\_\_

# -nt woorde

## Bou die woorde

se

te

bo

pu

ra

kla

ka

mu

li

-nt

Maak jou eie twee sinne met munt en punt.

Handwriting practice lines with a vertical red line on the left side.

# Division

Lets divide by 5

$$15 \div 5 = 3$$

\*count in 5's until you reach 15

$$**5 + 5 + 5$$

How many 5s can you count?  
There are 3 fives in 15.



Now you try!

$$20 \div 5 =$$

$$10 \div 5 =$$

$$40 \div 5 =$$

$$35 \div 5 =$$

$$25 \div 5 =$$

$$30 \div 5 =$$

Look at the picture and write your own story of at least 2 paragraphs.

Write about your favourite superhero!



A series of horizontal lines for writing. On the left side, there is a vertical red line that serves as a margin. The lines are evenly spaced and extend across the width of the page, providing a guide for paragraph structure.



## Tenses - past, present and future.

1. We are eating our food.

Future: \_\_\_\_\_

2. Ben was chasing the dog.

Present: \_\_\_\_\_

3. Carla will be playing the flute.

Present: \_\_\_\_\_

4. Jane is wearing blue jeans and a yellow top.

Past: \_\_\_\_\_

5. Dan is drinking cooldrink.

Past: \_\_\_\_\_

# Know your Tenses!

Example: \*past progressive - was helping  
\*present progressive - is helping

Verb	Past progressive	Present progressive
jump		
talk		
run		
sit		
walk		
talk		
cook		
bake		
read		



# Adverbs



\*Adverbs tell how an action is done.

Example - The snail moves slowly across the leave.

soft neat quick slow careful

Use the words to complete the sentences. (remember to change the word - slow - slowly)

1. She speaks very \_\_\_\_\_ to the class.
2. He runs very \_\_\_\_\_ to the shop.
3. They pack the toys very \_\_\_\_\_ in the box.
4. She carries the glasses \_\_\_\_\_ to the door.
5. The snail moves \_\_\_\_\_ across the sand.

Do the following sums by using the break up method

$134 + 266 =$

$221 + 187 =$

$175 - 126 =$

$352 - 228 =$

$436 + 24 =$

$319 + 28 =$

How quickly can you complete the multiplication questions?

$2 \times 3 =$

$7 \times 4 =$

$6 \times 4 =$

$8 \times 3 =$

$2 \times 6 =$

$4 \times 4 =$

$5 \times 3 =$

$9 \times 6 =$

$8 \times 5 =$

$4 \times 8 =$

Copy the Alphabet in cursive and remember your finger spaces.

a b c d e f g h i j k l m n o p q r s t u v w x y z  
A B C D E F G H I J K L M N O P Q R S T U V W X Y Z

A series of horizontal lines for handwriting practice. A vertical red line is positioned on the left side, serving as a guide for letter width. The lines are evenly spaced and extend across the width of the page.

Fill in the missing numbers:

201		203							
	212			215		217			
							238	239	
			244						
		253							
				265					
	272								
				295					300

Arrange the numbers from big to small

156, 218, 263, 148, 292

---

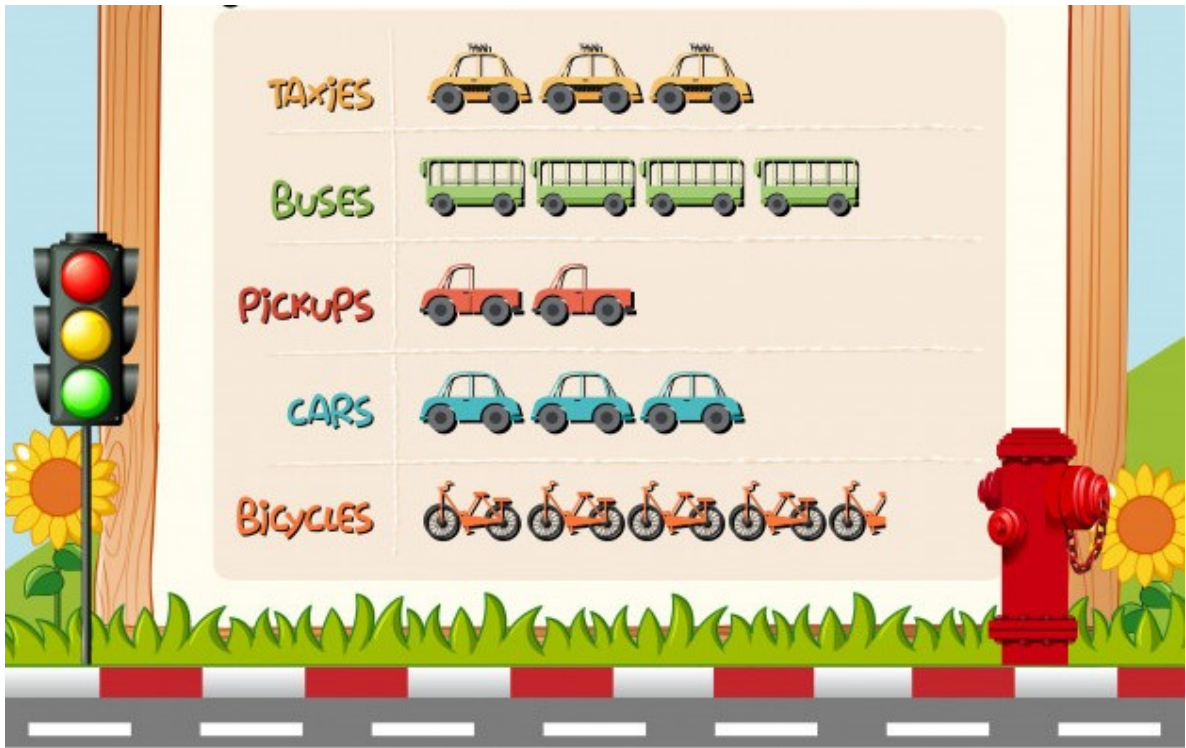
Arrange the numbers from small to big

159, 382, 264, 174, 148

---

# Data Handling

All transport vehicles represent x 10.



Taxies: 30

Buses: 40

Pickups: 20

Cars: 30

Bicycles: 50

How many use the bus transport? \_\_\_\_\_

How many use a bicycle? \_\_\_\_\_

Which transport do they use the most? \_\_\_\_\_

Which transport do they use the least? \_\_\_\_\_

How do you get to school? \_\_\_\_\_

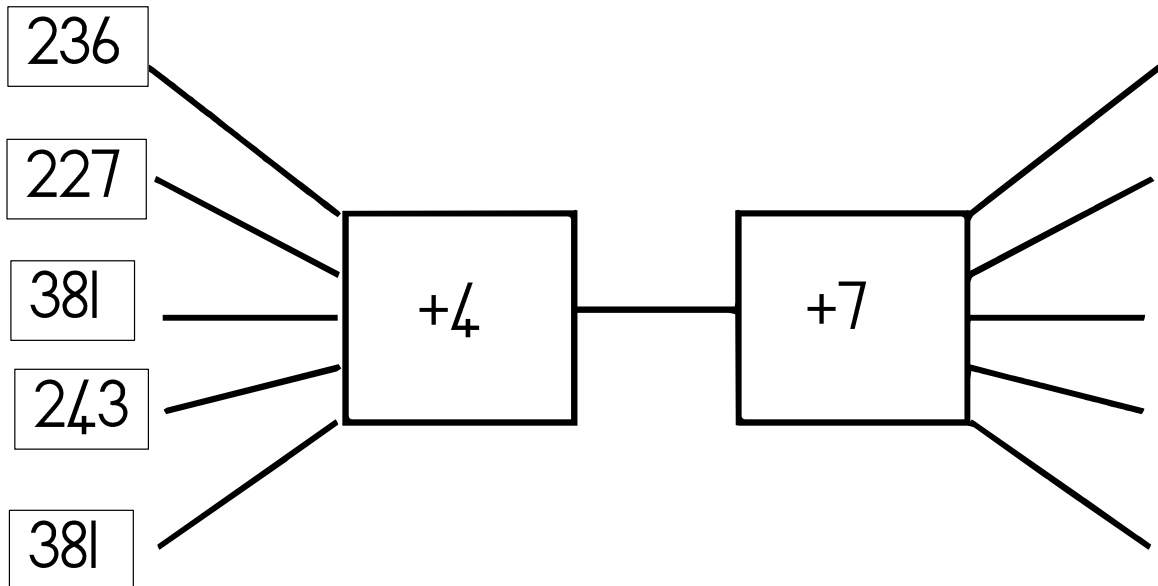
Copy the following paragraph in cursive writing.

Jonah loves to eat ice-cream. He buys ice-cream every second day. He likes chocolate, strawberry and vanilla flavour. Everyone knows Jonah and how he loves ice-cream.

A writing practice area consisting of 20 horizontal lines for text entry. A vertical red line is positioned on the left side, approximately one-fifth of the way across the page, to serve as a margin. The lines are evenly spaced and extend across most of the page width.



Complete the sums



Number names

186	
222	
239	
415	
373	

Woorde wat eindig met **-rs**

kers vers mors  
vars dwars wors  
dors pers bors



Vul die korrekte -rs woorde in om die sinne te voltooi.

1. Sy steek die \_\_\_\_\_ aan.
2. Sy hou van pienk en \_\_\_\_\_.
3. Die groente wat mamma maak is baie \_\_\_\_\_.
4. Pappa braai vleis en \_\_\_\_\_.
5. Die gedig het net een \_\_\_\_\_.
6. Die baba \_\_\_\_\_ die kos op die vloer.
7. Na die atletiek was ons baie \_\_\_\_\_.

Complete the missing sounds by choosing f or ph

tele\_\_one



\_\_ly



\_\_ox




dol\_\_in



al\_\_bet



\_\_ish



\_\_armacy



\_\_lowers



Make a sentence of the word telephone.





---

---

---

---

# 3D shapes

Shape	Name the shape	Ball shape or box shape
		
		
		
		

# Verbs

\*verbs are "doing" words.

**EXAMPLE:** I eat an apple every day.

Underline the verb in each sentence in **green**.

1. Jo runs to the store.
2. Sarah jumps on the trampoline.
3. Ben sits on the chair.
4. Lima plays soccer with his friends.
5. Dan sings a beautiful song.
6. He likes to eat rice.
7. I do my homework every day.
8. They love to draw on the paper.
9. Siphokazi loves to dance.
10. Donna plays netball for the school.




## Money problems

1. Ben has R36,00. He went to the store and bought chocolate of R13,00 and sweets of R9,50. How much change will he get?

2. Lukas bought a soccer ball of R29,00 and a cricket bat of R43,00. How much did he pay altogether?

3. Darren went to the shop with R40,00 and bought eggs for R17,00 and chips for R14,50. How much change will he get?



# Subtraction

Use an extra page to work out your answers.

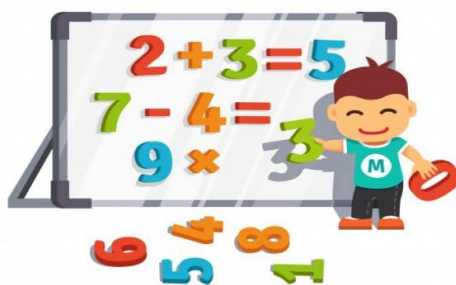
$150 - 35 =$	$297 - 43 =$
$418 - 8 =$	$190 - 36 =$
$261 - 59 =$	$242 - 74 =$
$112 - 121 =$	$189 - 86 =$
$278 - 227 =$	$314 - 168 =$







MINUS

Minus or Subtraction means to take away

$240 - 96 =$	$291 - 63 =$
$227 - 28 =$	$165 - 46 =$
$414 - 54 =$	$151 - 74 =$
$132 - 16 =$	$223 - 66 =$
$374 - 10 =$	$278 - 48 =$



Keep a diary of the weather for the week:

Day				
	sunny	rainy	windy	cloudy
Monday				
Tuesday				
Wednesday				
Thursday				
Friday				
Saturday				
Sunday				

How many days were sunny? \_\_\_\_\_

How many days were rainy? \_\_\_\_\_

How was the weather on Friday? \_\_\_\_\_

What happens if it is windy? \_\_\_\_\_

What is your favourite weather? \_\_\_\_\_



Time:



o'clock



o'clock



o'clock



o'clock



o'clock



o'clock



Read the digital time and write the time out in words:

05:00	
16:30	
10:45	
12:30	
04:30	

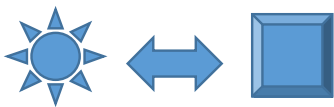
Match the correct shadow for each picture.



Find the 5 differences in the picture below.



Copy the patterns



Arrange the following numbers in descending order.

128, 392, 329, 298, 246

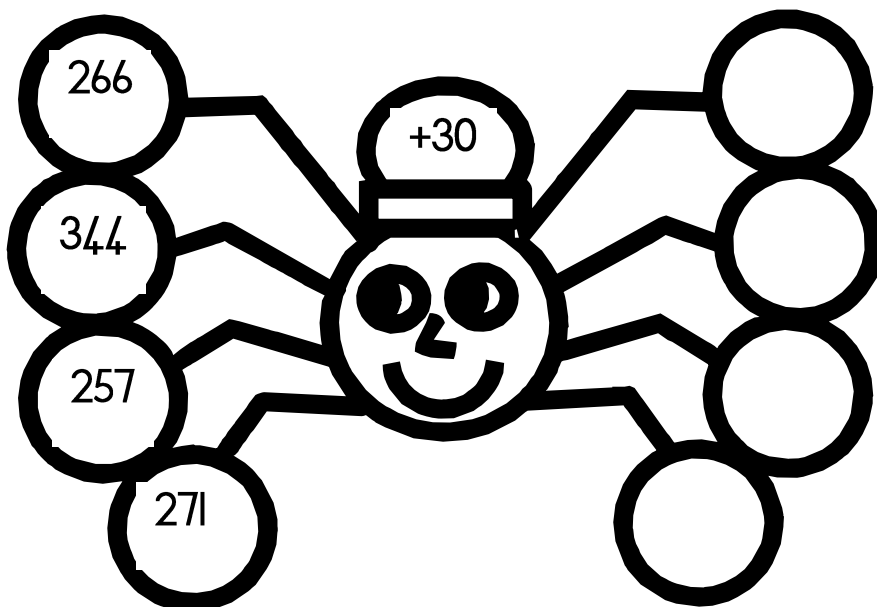
--	--	--	--	--

Arrange the following numbers in ascending order.

426, 118, 269, 258, 353

--	--	--	--	--

Complete the spider sum



Write 8 sentences about own news.



A series of horizontal lines for writing, with a vertical red margin line on the left side.

Decompose the following three digit numbers

$328 = \underline{\quad\quad\quad} + \underline{\quad\quad\quad}$

$231 = \underline{\quad\quad\quad} + \underline{\quad\quad\quad}$

$449 = \underline{\quad\quad\quad} + \underline{\quad\quad\quad}$

$583 = \underline{\quad\quad\quad} + \underline{\quad\quad\quad}$

Use one of the following to compare the number  $>$   $<$  or  $=$

$189 \underline{\quad} 198$

$245 \underline{\quad} 340$

$441 \underline{\quad} 341$

$112 \underline{\quad} 110$

$362 \underline{\quad} 334$

$439 \underline{\quad} 199$

$155 \underline{\quad} 185$

$127 \underline{\quad} 191$

Count in 5's

165			180						
	345				365				
175						145			

Count in 10's

190			220						
	180				40				
380						440			





Copy the Alphabet in cursive and remember your finger spaces.

a b c d e f g h i j k l m n o p q r s t u v w x y z  
A B C D E F G H I J K L M N O P Q R S T U V W X Y Z



A series of horizontal lines for handwriting practice. A vertical red line is positioned on the left side, serving as a guide for letter width. The lines are evenly spaced and extend across the width of the page.

Count the pictures:



How many sunflowers? \_\_\_\_

How many purple flowers? \_\_\_\_



How many crayons? \_\_\_\_

How many ladybirds? \_\_\_\_

How quickly can you do the multiply sums?

$9 \times 8 =$

$10 \times 5 =$

$7 \times 4 =$

$6 \times 6 =$

$2 \times 7 =$

$7 \times 7 =$

$10 \times 3 =$


$4 \times 6 =$

$8 \times 6 =$






# oo-klank

Hoeveel woorde kan jy bou met die -oo- klank?



Skryf die woorde wat jy kon bou in die blokkies.


Look at the following products. Write down the mass in kg of each product in the table below.



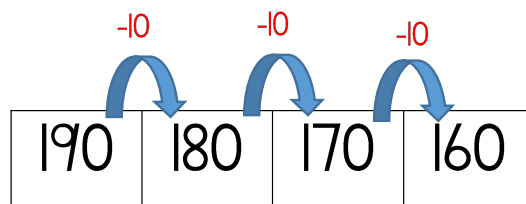
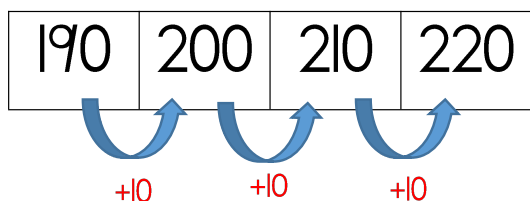
Wheat	_____kg
Oats	_____kg
Corn	_____kg
Rice	_____kg

Look at the picture. Write a story about Leon the scientist. Remember to use the correct punctuation.



# Count forwards and backwards in 10's

Counting in 10's should be very easy by simply adding 10 or subtracting 10. Lets see!



Can you try now?

240	230					
-----	-----	--	--	--	--	--

310	320					
-----	-----	--	--	--	--	--

110	120					
-----	-----	--	--	--	--	--

200	190					
-----	-----	--	--	--	--	--

270	260					
-----	-----	--	--	--	--	--

Practise the number names

250 - two hundred and fifty

219 - \_\_\_\_\_

199 - \_\_\_\_\_

308 - \_\_\_\_\_

236 - \_\_\_\_\_

155 - \_\_\_\_\_

Choose the correct word to complete the sentences.

pause Autumn  
haunted because  
sauce August vault  
taught auction



1. My birthday is in the month of \_\_\_\_\_.
2. The bank has a \_\_\_\_\_ with money.
3. The teacher \_\_\_\_\_ us this lesson.
4. I like to throw \_\_\_\_\_ on my rice.
5. It is now \_\_\_\_\_ season.
6. The house on the hill is \_\_\_\_\_.

Gebruik die volgende woorde en maak jou eie sinne?

vuur

---

---

---

---

muur

---

---

---

---

duur

---

---

---

---

suur

---

---

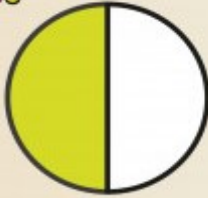
---

---


Complete the fractions below:

Color to show the fractions

a.

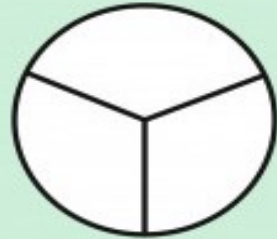


b.



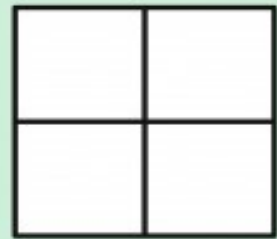

$\frac{2}{3}$

COLOR



$\frac{3}{4}$

COLOR



$\frac{3}{5}$

COLOR



$\frac{1}{2}$

COLOR





# Can you do the word puzzle?



X	I	X	Z	B	Z	M	H	G	V
R	F	A	V	S	V	K	M	N	O
J	E	A	R	I	G	Y	E	I	L
G	T	F	H	N	H	B	O	M	L
S	A	P	V	N	N	G	D	M	E
G	R	P	C	E	O	U	T	I	T
S	A	X	O	T	Z	R	N	W	B
P	K	S	Z	X	E	L	V	S	A
S	O	C	C	E	R	B	F	T	L
V	P	K	F	L	O	G	N	W	L



# SHAPES

Match the 2D shape with the correct 3D shape

