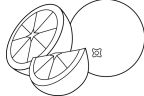
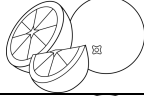


































Each child in the class said what their favourite fruit is.

10					
9					
8					
7					
6					
5					
4					
3					
2					
1					
	pears	apples	oranges	peaches	bananas

- Which is the most? \_\_\_\_\_
- Which is the least? \_\_\_\_\_
- How many peaches are there? \_\_\_\_\_
- There are four \_\_\_\_\_.
- The \_\_\_\_\_ and \_\_\_\_\_ are equal.
- How many oranges should we take away for them to be equal to the apples? \_\_\_\_\_
- How many children are in this class? \_\_\_\_\_