

Practice test 3

Total: 20 Marks

Count in fives.

(1)

5	10		20			35			50
---	----	--	----	--	--	----	--	--	----

Count backwards in tens.

(1)

100, 90, _____, _____, _____, 50, _____, _____, _____, _____, 0

Count in tens to 100.

(1)

10			40			70			100
----	--	--	----	--	--	----	--	--	-----

Halving:


(4)

4 is _____

8 is _____

12 is _____

16 is _____



There are four flowers. Each flowers has two leaves. How many leaves do they have altogether? (3)

Write the answers for the following.

(5)

two more than 16 is ____ .

two less than 12 is ____ .


18 is one more than ____.

16 is two more than ____ .

11 is two less than ____ .


Colour the block that has the most.

(1)



Colour the block that has less.

(1)



Before, between and after.

(3)

Which number comes before 17? ____

Which number comes after 32? ____

Which number is between 24 and 26? ____