

# Practice test 3

Total: 20 Marks

Count in fives. (1) One mark if all the answers are correct.

5	10	15	20	25	30	35	40	45	50
---	----	----	----	----	----	----	----	----	----

Count backwards in tens. One mark if all the answers are correct.

100, 90, 80, 70, 60, 50, 40, 30, 20, 10, 0

Count in tens to 100. One mark if all the answers are correct.

10	20	30	40	50	60	70	80	90	100
----	----	----	----	----	----	----	----	----	-----

Halving:

4 is 2

⊗ ⊗ ⊗ ⊗

○ ○	○ ○
-----	-----

8 is 4

⊗ ⊗ ⊗ ⊗ ⊗ ⊗ ⊗ ⊗

○ ○ ○ ○	○ ○ ○ ○
---------	---------

12 is 6

⊗ ⊗ ⊗ ⊗ ⊗ ⊗ ⊗ ⊗ ⊗ ⊗ ⊗ ⊗

○ ○ ○ ○ ○ ○	○ ○ ○ ○ ○ ○
-------------	-------------


16 is 8

⊗ ⊗ ⊗ ⊗ ⊗ ⊗ ⊗ ⊗ ⊗ ⊗ ⊗ ⊗ ⊗ ⊗

○ ○ ○ ○ ○ ○ ○ ○	○ ○ ○ ○ ○ ○ ○ ○
-----------------	-----------------

(4)

No marks allocated if the learner did not show how the answer was reached. Circles or lines MUST be drawn. If there are no circles, the answer is wrong. Circles at the top MUST first be taken away, or the answer will be wrong.



There are four flowers. Each flowers has two leaves. How many leaves do they have altogether?  
(Three marks in total: one mark for the correct sum; one mark for showing how you got the answer - circles or pictures drawn; one mark for the correct answer that MUST include the correct word) (3)

oo oo oo oo

---

$$2 + 2 + 2 + 2 = 8 \text{ leaves}$$

---

Write the answers for the following. (5)

two more than 16 is 18 .


two less than 12 is 10 .

18 is one more than 17.


16 is two more than 14 .

11 is two less than 13 .

Colour the block that has the most. (1)



Colour the block that has less. (1)



Before, between and after. (3)

Which number comes before 17? 16

Which number comes after 32? 33

Which number is between 24 and 26? 25