



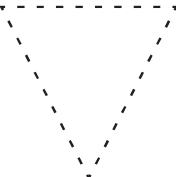
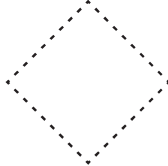


2-D shapes – straight and round sides

Term 4






Trace the following shapes.

 triangle	 circle	 square
 circle	 triangle	 square



Tick to say if the shape has straight or round sides.


 round sides <input type="checkbox"/> straight sides <input type="checkbox"/>	 round sides <input type="checkbox"/> straight sides <input type="checkbox"/>	 round sides <input type="checkbox"/> straight sides <input type="checkbox"/>
--	--	--



Draw a shape with:

straight sides	round sides
----------------	-------------





Count the number of circles, squares and triangles.

Circles Squares Triangles



Find a picture from a magazine of something that has:

round sides

straight sides



Teacher: _____
Sign: _____
Date: _____