

Name \_\_\_\_\_

25

1. Complete the following.

(3)

Before	
28	29

In-between		
37	38	39

After	
44	45

2. Answer the following questions.

(4)

2 more than 13 is	15
2 less than 18 is	16
19 is 2 more than	17
14 is 2 less than	16

3. Break up into tens and units.

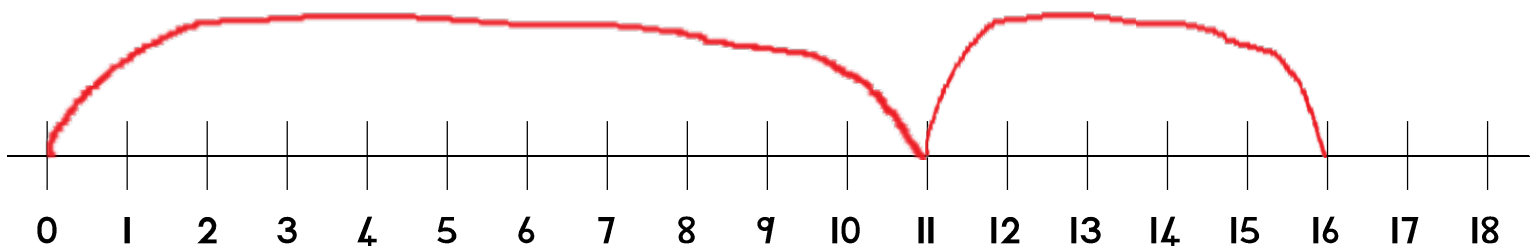
(2)

$$12 = \underline{10} + \underline{2} \quad 17 = \underline{10} + \underline{7}$$

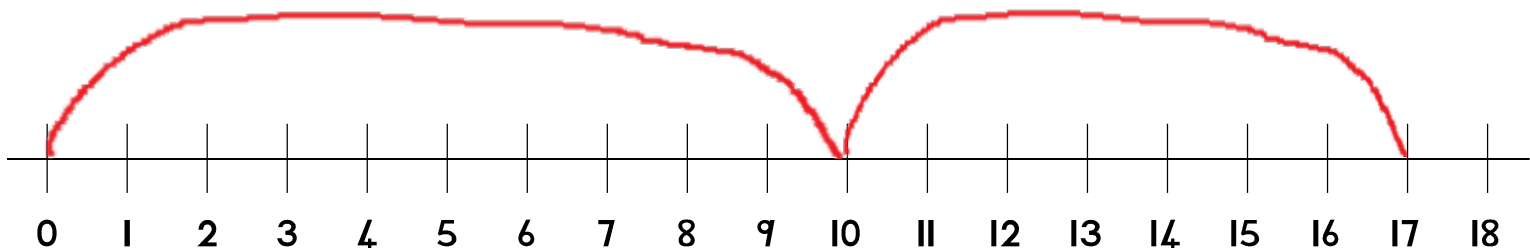
4. Find the answers on the number line.

(4)

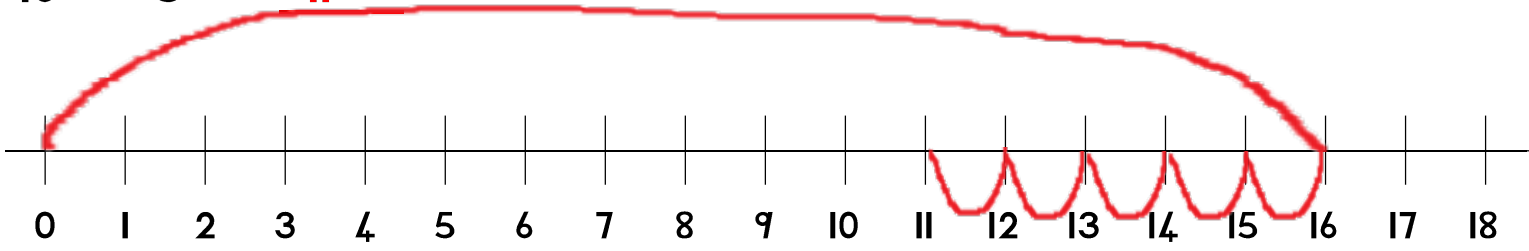
$$11 + 5 = \underline{16}$$



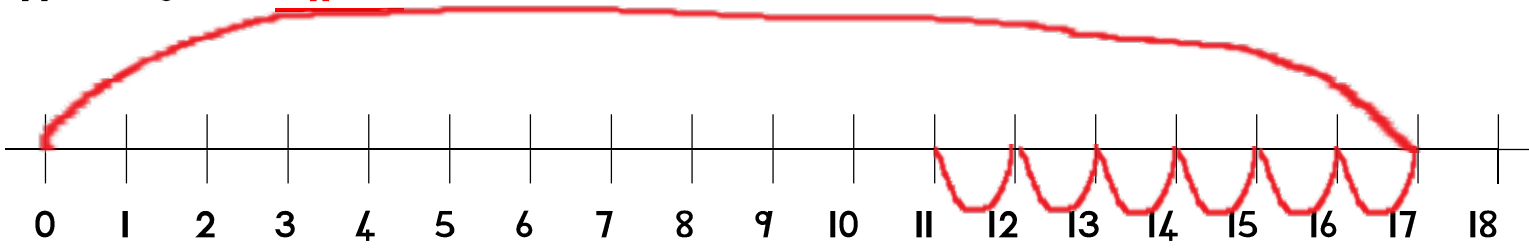
$$10 + 7 = \underline{17}$$



$$16 - 5 = 11$$



$$17 - 6 = 11$$



5. Calculate the change.

(2)

$$R_{19,00} - R_{13,00} = \underline{R_{6,00}}$$

oooooooooooooooooooooooooooooooo

$$18C - 13C = \underline{5C}$$

oooooooooooooooooooooooooooooooo

6. Calculate the totals.

(2)

$$R_{15,00} + R_{4,00} = \underline{R_{19,00}}$$

oooooooooooooooooooo oooo

$$10C + 9C = \underline{19C}$$

oooooooooooo ooooooooooooo

7. Repeated addition.

(2)

$$3 + 3 + 3 + 3 = \underline{12}$$

ooo   ooo   ooo   ooo

or    $3 + 3 \rightarrow 6 + 3 \rightarrow 9 + 3 \rightarrow 12$

$$4 + 4 + 4 = \underline{12}$$

oooo   oooo   oooo

or    $4 + 4 \rightarrow 8 + 4 \rightarrow 12$

8. Solve the following word problems.

(6)

There are 3 baskets. There are 6 flowers in each basket.  
How many flowers are there altogether?

$$6 + 6 + 6 = 18 \text{ flowers}$$

oooooooo   ooooooooo   ooooooooo

There are 20 balloons. The balloons must be divided equally  
among 4 children. How many balloons will each child get?

$$20 \div 4 = 5 \text{ balloons}$$

oooooooooooooooooooooooooooooooo

ooooo

ooooo

ooooo

ooooo