

Name _____

25

1. Complete the following.

(3)

Before	
	29

In-between		
37		39

After	
44	

2. Answer the following questions.

(4)

2 more than 13 is	
2 less than 18 is	
19 is 2 more than	
14 is 2 less than	

3. Break up into tens and units.

(2)

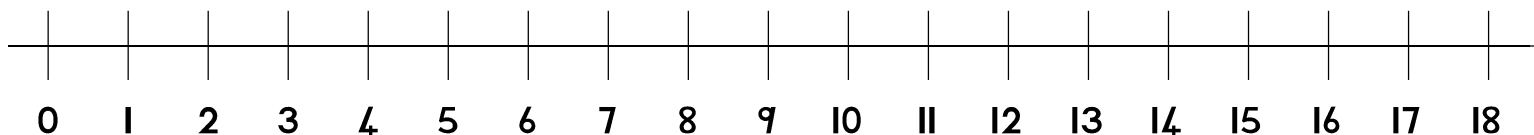
$12 = \underline{\quad} + \underline{\quad}$

$17 = \underline{\quad} + \underline{\quad}$

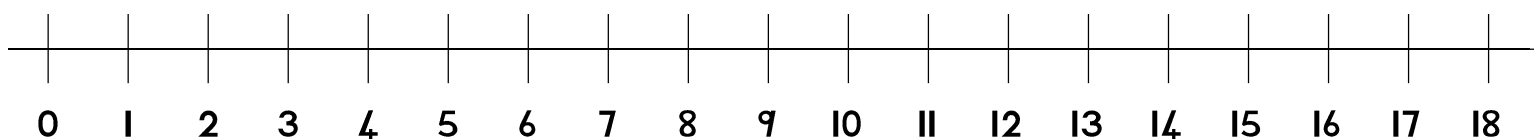
4. Find the answers on the number line.

(4)

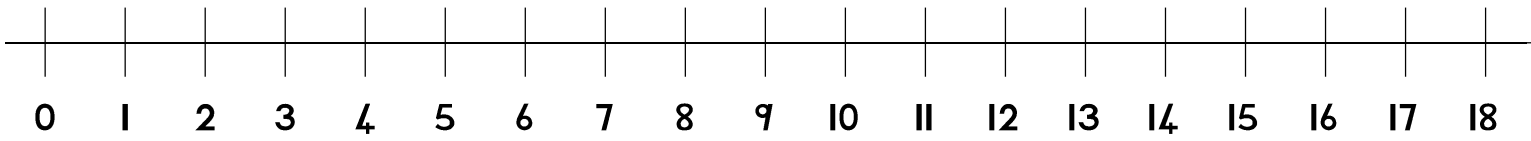
$11 + 5 = \underline{\quad}$



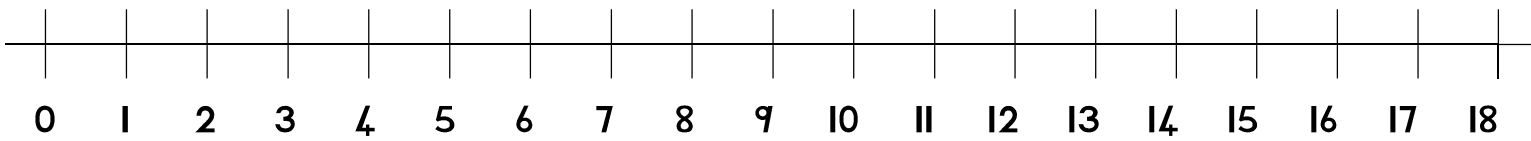
$10 + 7 = \underline{\quad}$



$$16 - 5 = \underline{\hspace{2cm}}$$



$$17 - 6 = \underline{\hspace{2cm}}$$



5. Calculate the change.

(2)

$$R_{19,00} - R_{13,00} = \underline{\hspace{2cm}}$$

$$18C - 13C = \underline{\hspace{2cm}}$$

6. Calculate the totals.

(2)

$$R_{15,00} + R_{4,00} = \underline{\hspace{2cm}}$$

$$10C + 9C = \underline{\hspace{2cm}}$$

7. Repeated addition.

(2)

$$3 + 3 + 3 + 3 = \underline{\quad}$$

$$4 + 4 + 4 = \underline{\quad}$$

8. Solve the following word problems.

(6)

There are 3 baskets. There are 6 flowers in each basket.
How many flowers are there altogether?

There are 20 balloons. The balloons must be divided equally
among 4 children. How many balloons will each child get?
